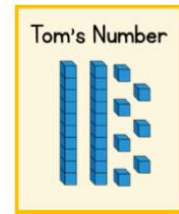
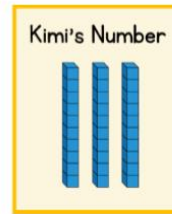


Complete the sentences. Kimi and Tom have each made a number.

1 more than 38 is

1 less than 30 is

24 is 1 less than



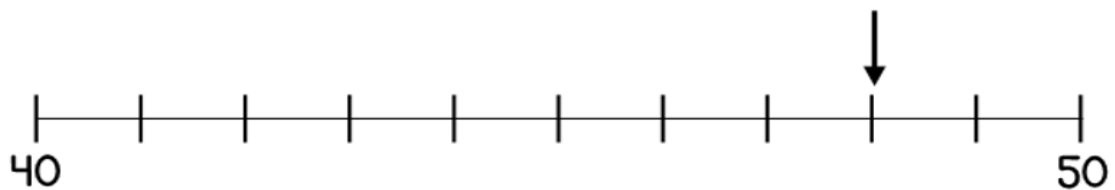
Who has made the smallest number?

Circle your answer.

Kimi Tom

They have made the same number.

Here is a number line.



What number is the arrow pointing to?


Circle the largest number.

35

38

29

How many beanbags are there?




There are \_\_\_\_ beanbags.

Complete the missing numbers.

44	45	46	47		
----	----	----	----	--	--

26	27	28			
----	----	----	--	--	--

How many counters are there?



There are \_\_\_\_ counters.

Amy makes a number.



What number has Amy made?

Amy has made the number \_\_\_\_

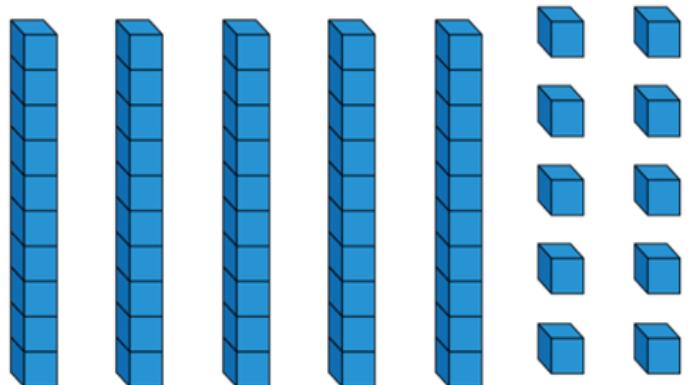
Sam makes a number.



What number has Sam made?

Sam has made the number \_\_\_\_

Circle 35



## Place Value to 50 Assessment