

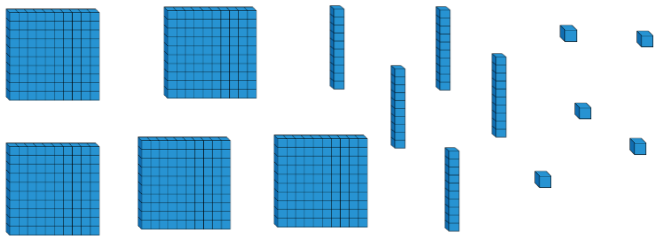
Year 4

Place Value Assessment

Name _____



1 Circle 341



1 mark

2 What number is shown on the place value grid?

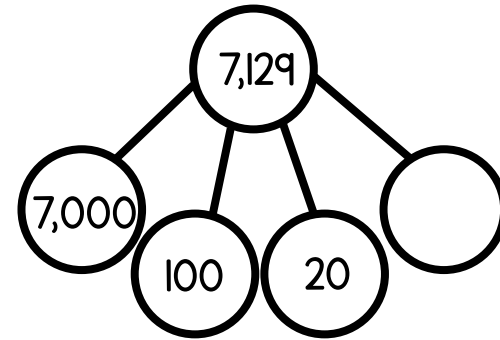
Thousands	Hundreds	Tens	Ones

1 mark

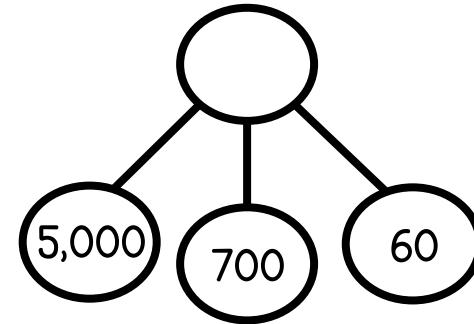
1 mark

Draw more counters to make the number 3,048

3 Complete the part-whole diagrams.

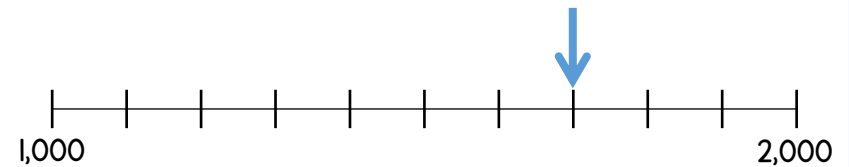


1 mark



1 mark

4 What number is shown by the arrow?



1 mark

1 mark

Draw an arrow to the number 1,999

- 5 What is the value of the 5 digit in each of these numbers?
Match the correct number to the correct value.

511

5 thousands

5,103

5 hundreds

6,950

5 tens

695

5 ones

2 marks

- 6 Using the digit cards make an even number between 7000 and 8000



2 marks

- 7 Complete the missing numbers.

6,100		6,200	6,250	6,300		
-------	--	-------	-------	-------	--	--

2 marks

- 8 Jim makes a 4 digit number.

- The hundreds digit is a 7
- The tens digit is one more than the thousands digit.
- The sum of all the digits is 10

What number did Jim make?

1 mark

- 9 Circle which of the following is equal to 5,042

$50 + 42$

$50 + 40 + 2$

$5000 + 400 + 2$

$5,000 + 40 + 2$

1 mark

Circle how confident you feel with place value.

1

2

3

4

5

Not
confident

Very
confident